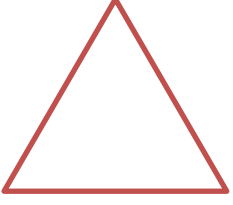


Adı : .....  
Soyadı: .....

1 . Sınıf  
Matematik

Geometrik Şekiller  
Köşe-Kenar-1


Köşelerini gösteriniz. Kaç tane köşe var?




..... köşe




..... köşe




..... köşe



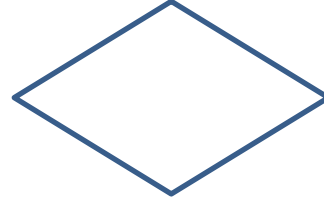
..... köşe



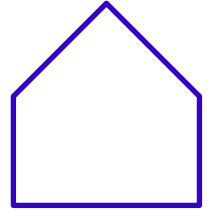
.... köşe



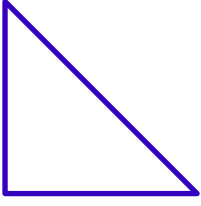
..... köşe



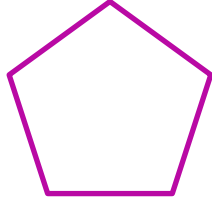
..... köşe




..... köşe




.... köşe




..... köşe




..... köşe




..... köşe




.... köşe



..... köşe



..... köşe



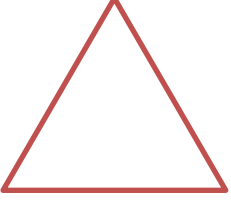
..... köşe

Adı : .....  
Soyadı: .....

1 . Sınıf  
Matematik

Geometrik Şekiller  
Köşe-Kenar-1

Köşeleri göster. Köşeleri birleştir. Kenarları say.




3 kenar




..... kenar




..... kenar



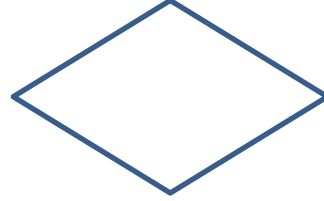
..... kenar



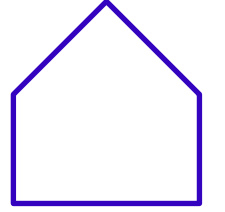
.... kenar



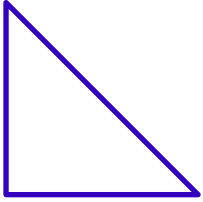
..... kenar



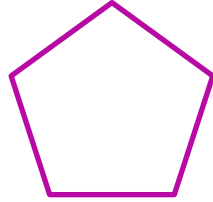
..... kenar




..... kenar




.... kenar




..... kenar




..... kenar




..... kenar




.... kenar



..... kenar



..... kenar



..... kenar